



1. Write your first and last name \_\_\_\_\_

2. How many warts are on the witch's chin? \_\_\_\_\_

How many stars are on the witch's hat? \_\_\_\_\_



What kind of necklace is the witch wearing? \_\_\_\_\_

3. Match the cauldron to the correct number below:



14

15


16

17


18

19

4. Circle the picture that has more cats.



\_\_\_\_\_



\_\_\_\_\_

How many cats are there in each group?

5. Match the jack-o-lanterns to the correct number below



8

12

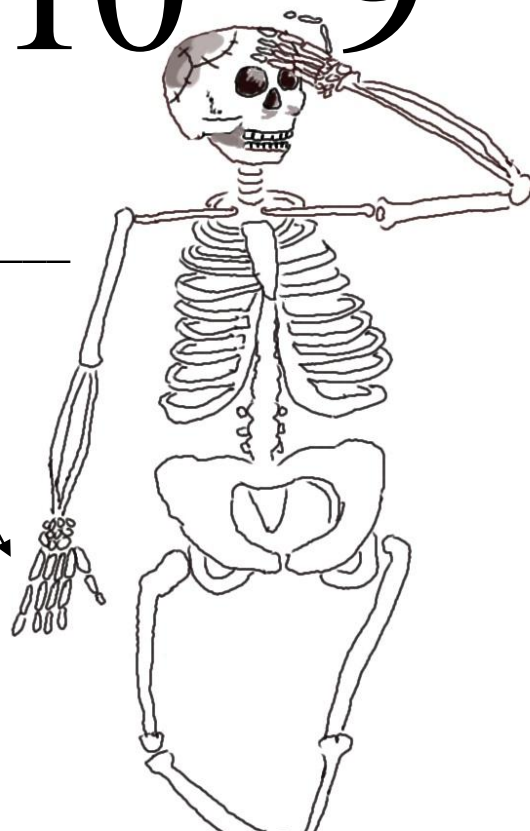
6

10

9

6. How many finger bones are there? \_\_\_\_\_

7. How many arm bones does this skeleton have? \_\_\_\_\_



8. If you had two cats, how many legs would there be in all?




\_\_\_\_\_ + \_\_\_\_\_ = \_\_\_\_\_

How many whiskers do these two cats have? \_\_\_\_\_

9. A boy dresses as an alien for Halloween.

How many eyes does the alien have? \_\_\_\_\_

The alien has suction cups on each of his hands. How many suction cups are there all together? \_\_\_\_\_



How many buttons are on his shirt? \_\_\_\_\_


Each button has two dots. How many dots are there in all? \_\_\_\_\_

10. How many brooms are there? \_\_\_\_\_

How old are you? \_\_\_\_\_ Circle one broom for each year you are.



Add the cats:



$$\underline{\hspace{2cm}} + \underline{\hspace{2cm}} = \underline{\hspace{2cm}}$$

Add the skeletons:



$$\underline{\hspace{2cm}} + \underline{\hspace{2cm}} = \underline{\hspace{2cm}}$$

Add the jack-o-lanterns:



$$\underline{\hspace{2cm}} + \underline{\hspace{2cm}} = \underline{\hspace{2cm}}$$

Add the brooms:



$$\underline{\hspace{2cm}} + \underline{\hspace{2cm}} = \underline{\hspace{2cm}}$$